

MATEMÁTICA

Nombre: _____

Completa la secuencia numérica.

1 2 3 4 5 6 7 8 9 10

The first puzzle features a dog illustration and a sequence: 1, [], [], [], 5, [], 7, [], [], 9, []. A ball is shown to the right.


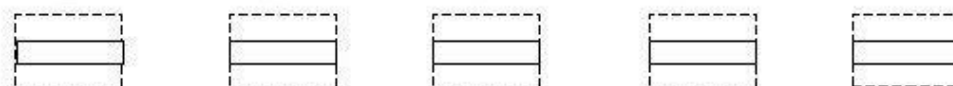
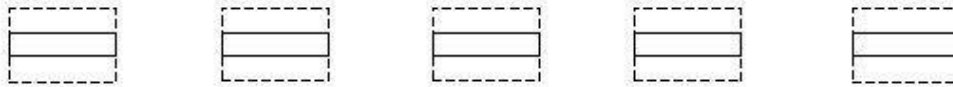
The second puzzle features a dog illustration and a sequence: [], 2, [], [], 4, [], 6, [], 8, [], 10. A bone is shown to the right.

The third puzzle features a dog illustration and a sequence: 1, [], [], [], [], [], [], [], [], [], 10. A doghouse is shown to the right.

NOMBRE: _____

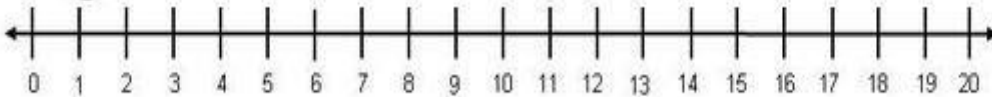

FECHA: ____ / ____ / ____

COMPLETA LA SERIE
Y CÓPIALA DEBAJO.



Name _____ Date _____

Write your numbers 0 to 20. Use the number line if you need help.



1

4



13



16

